



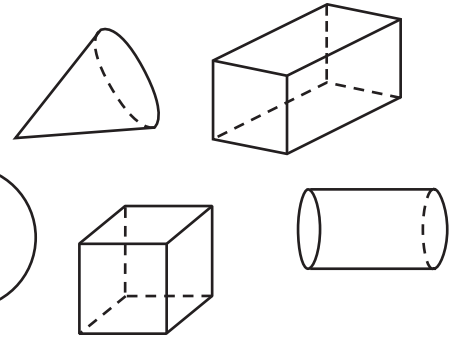
# Module 15 Assessment

## Vocabulary

1. Color the **cube** with . (p. 558)


2. Color the **cone** with . (p. 552)

3. Color the **cylinder** with . (p. 552)



## Concepts and Skills

4. Circle the objects you could trace to draw the shape. TEKS 1.6.E



5. Circle the object below that has only a curved surface. TEKS 1.6.E

6. Draw a line under the objects below that have both curved and flat surfaces. TEKS 1.6.E






7. Which number completes the sentence?

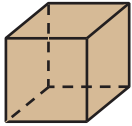
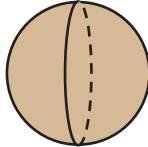
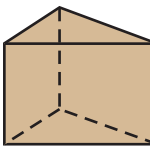
A rectangular prism has    ? faces. ★ TEKS 1.6.E

- 8                       6                       4

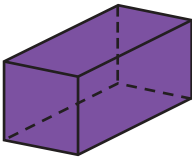
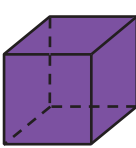
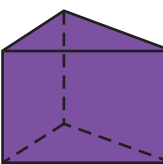
8. Which shape can you draw if you trace around a flat surface of a cube? ★ TEKS 1.6.E

-                                               

9. Which solid has 6 faces? ★ TEKS 1.6.E

-                                               

10. Which solid has 6 vertices? ★ TEKS 1.6.E

-                                               

11. Which solid matches the riddle? ★ TEKS 1.6.E

I am a block.  
I have 8 vertices.  
I have 12 edges.

- 